

# Prep4sureGuide

## WELCOME USE TEST ENGINE

Prepare your actual test with our sure pass exam guide for successful result

Input your exam code ...

Our sure prep material equipped with the highest experts team and the most authoritative exam items plus the best service, which can ensure you 100% pass. Besides, our exam training guide can support both the fastest delivery speed and the shortest time to get all knowledge.



### Quality and Value

Prep4sureGuide Practice Exams are written to the highest standards of technical accuracy, using only certified subject matter experts and published authors for development - no all dumps.



### Tested and Approved

We are committed to the process of vendor and third party approvals. We believe professionals and executives alike deserve the confidence of quality coverage these authorizations provide.



### Easy to Pass

If you prepare for the exams using our Prep4sureGuide testing engine, It is easy to succeed for all certifications in the first attempt. You don't have to deal with all dumps or any free torrent / rapidshare all stuff.



### Try Before Buy

Prep4sureGuide offers free demo of each product. You can check out the interface, question quality and usability of our practice exams before you decide to buy.



HAPPY CUSTOMERS

32694



DOWNLOADS

62152



TEAM MEMBERS

32694



SHARES

56692

<http://www.prep4sureguide.com>

Prepare your actual test with our sure pass exam guide for successful result

**Exam** : **GED-Mathematics**

**Title** : GED Mathematical Reasoning  
Exam (Mathematics)

**Vendor** : GED

**Version** : DEMO

NO.1 What is the ratio of the percent of sales from sporting goods to the percent of sales from stationery?

- A. 3
- B. 7
- C. 15
- D. 4
- E. 12

**Answer:** A

NO.2 An octagonal lamp has 8 square glass sides. The total area of the glass used for the lamp is given by the formula  $g = 8x^2$ , where  $g$  is the area of the glass and  $x$  is the length of one side of the squares. If the squares have sides whose length is 6 inches, what is the total area (in square inches) of the glass used to make the lamp?

- A. 2340
- B. 288
- C. 96
- D. 48
- E. 8

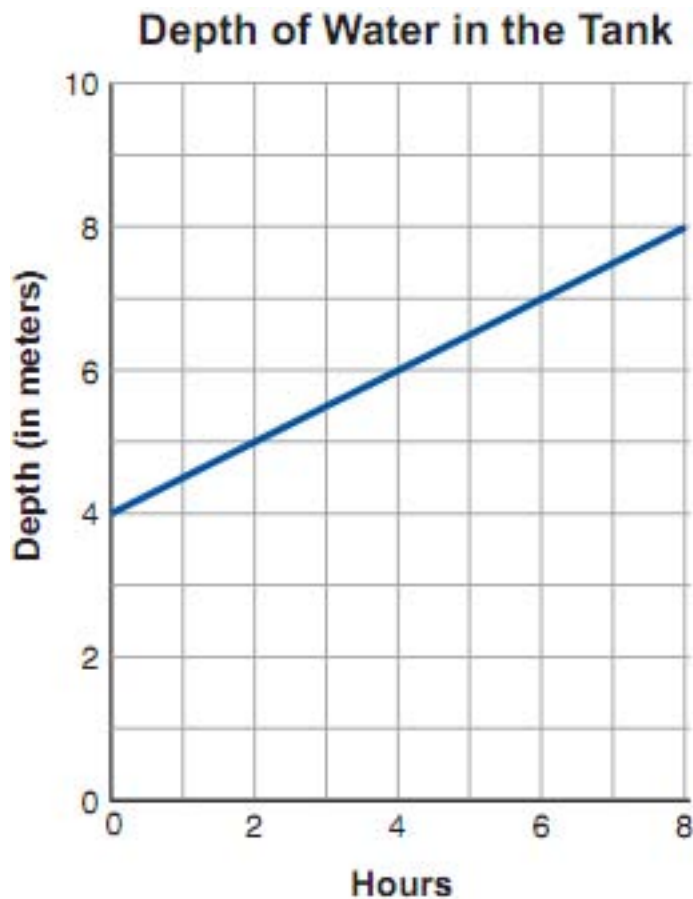
**Answer:** B

NO.3 Adora's car averages 28 miles per gallon of gas. Approximately how many gallons of gas should she expect to use for a trip of 190 miles?

- A. 3
- B. 5
- C. 7
- D. 9
- E. 10

**Answer:** C

NO.4



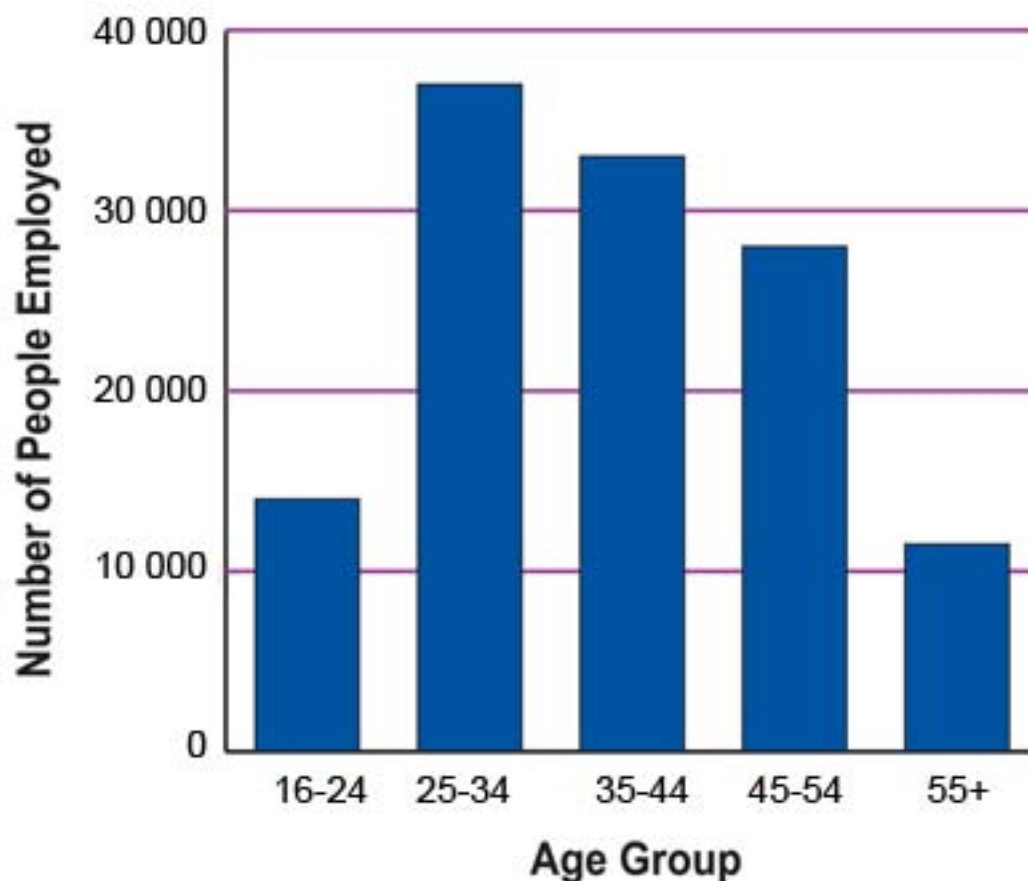
Which of the following functions represents the depth of water ( $d$ ) in the tank in terms of the number of hours ( $t$ ) after the refilling began?

- A.  $d = 2t + 4$
- B.  $d = 2t$
- C.  $d = 0.50t + 2$
- D.  $d = 0.50t + 4$
- E.  $d = 0.50t$

**Answer:** D

NO.5 Marion County's total population of 184,026, the number of people employed (including self employed) is 122,939. The number of people employed is broken down by age group in the graph below.

## Marion County Employment by Age Group



What is the DIFFERENCE, to the nearest thousand, between the number of employed people in Marion County in the 25-to-34 age group and the 55-and-over age group?

- A. 11,000
- B. 14,000
- C. 26,000
- D. 37,000
- E. 48,000

**Answer:** C

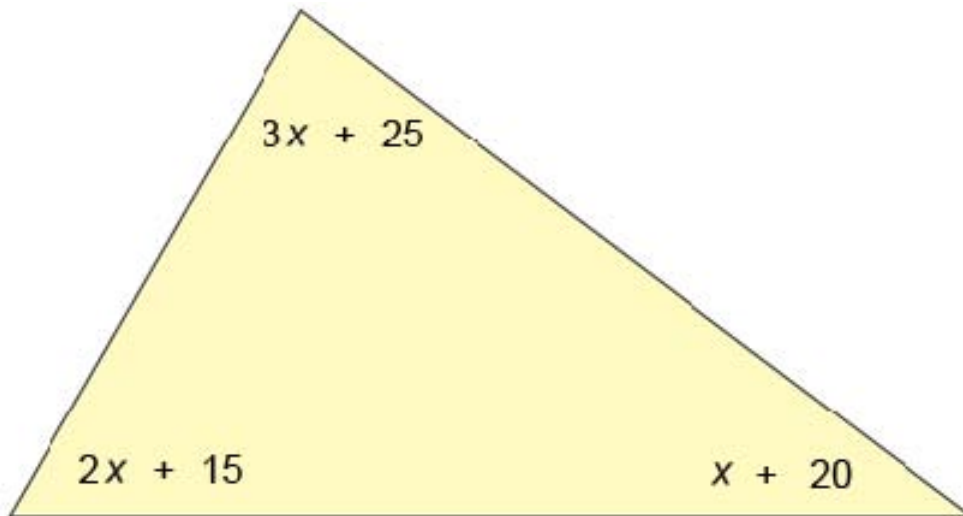
NO.6 Lamar and Angela each bought sofas that cost \$399.00 each, including tax. Angela paid cash, but Lamar paid 10% of the cost and made 12 monthly payments of \$36.00 each.

How much MORE did Lamar pay than Angela?

- A. \$ 39.90
- B. \$ 33.00
- C. \$ 72.90
- D. \$ 432.00
- E. \$ 471.90

**Answer: C**

NO.7



Expressions for the measures of the angles of a triangle are shown in the diagram below. Which of the following equations would be used to find the value of  $x$ ?

- A.  $2x + 15 + x + 20 = 3x + 25$
- B.  $3x + 25 + 2x + 15 = x + 20$
- C.  $3x + 25 + x + 20 = 2x + 15$
- D.  $3x + 25 + 2x + 15 + x + 20 = 360$
- E.  $3x + 25 + 2x + 15 + x + 20 = 180$

**Answer: E**

NO.8

Size	Cost Per Basket
Small	\$4.50
Medium	\$8.00
Large	\$15.00

A basket weaver charges the following amounts for baskets:

If 7 small baskets, 4 medium baskets, and 3 large baskets were sold, which of the following expressions would equal the total amount of basket sales?

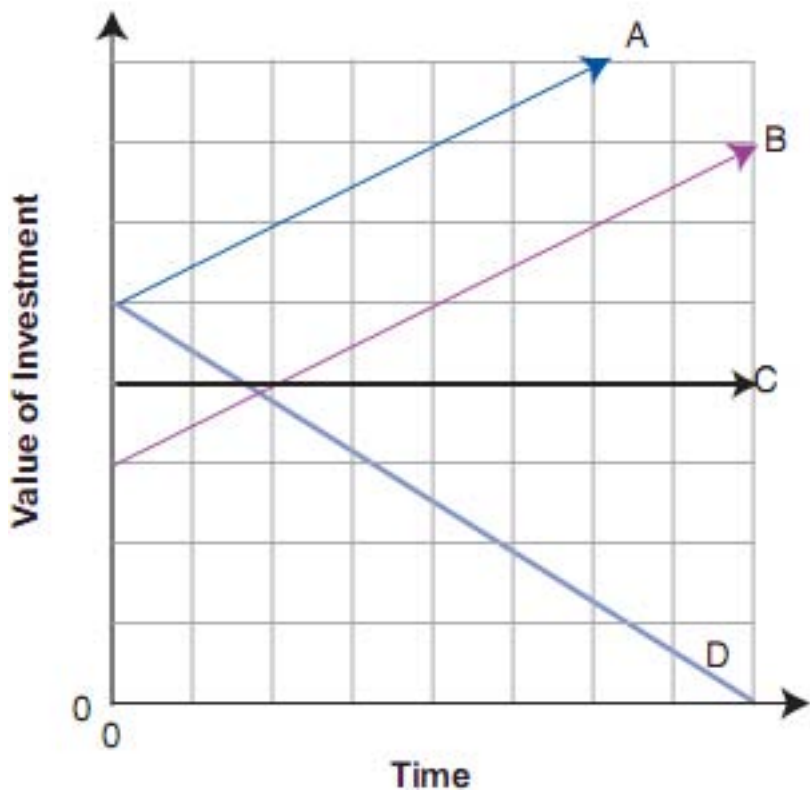
- A.  $14(\$27.50)$
- B.  $\$4.50 + \$8.00 + \$15.00$
- C.  $4(\$4.50) + 3(\$8.00) + 7(\$15.00)$
- D.  $3(\$4.50) + 7(\$8.00) + 4(\$15.00)$
- E.  $7(\$4.50) + 4(\$8.00) + 3(\$15.00)$

**Answer: E**

NO.9

The values of several investments over time are shown in the graph below.

**Changing Value of Investments over Time**

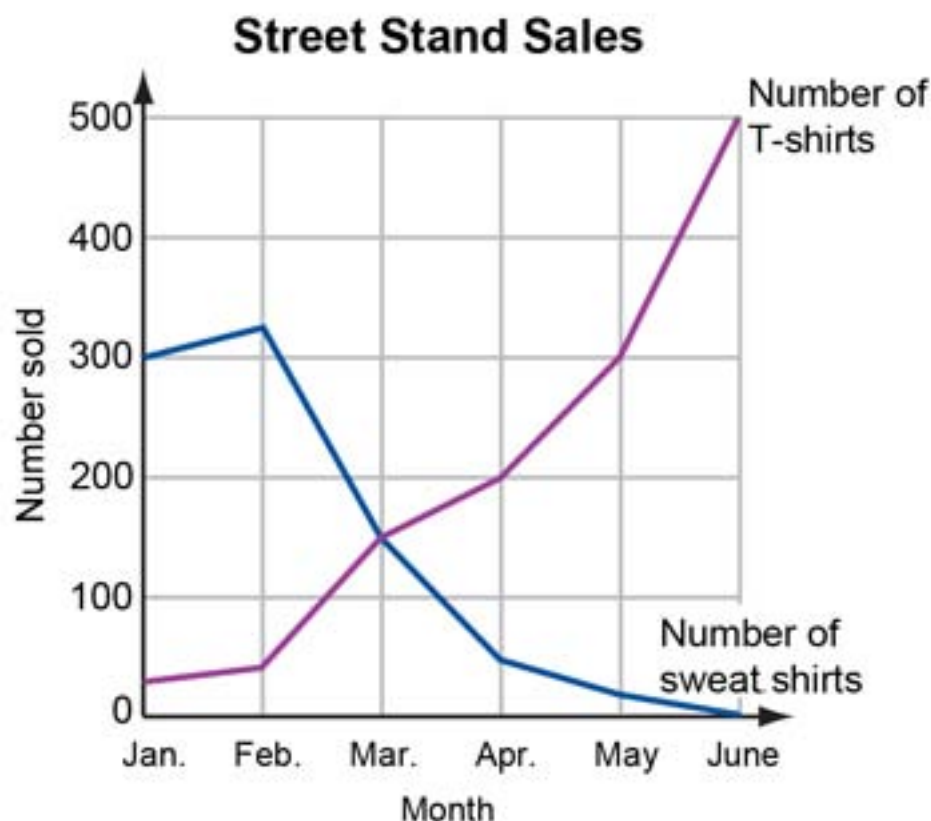


For which two investments was the same amount of money initially invested?

- A. B and C
- B. B and D
- C. A and B
- D. A and C
- E. A and D

**Answer:** E

NO.10



The numbers of sweat shirts and T-shirts sold at a street stand during the first six months of the year are shown in the graph at the left.

During which month were the numbers of sweat shirts and T-shirts sold the same?

- A. February
- B. March
- C. April
- D. May
- E. June

**Answer:** B

NO.11 Hattie, the manager of Speedy Burgers, wants to know the average amount of time it takes customers to order once they reach the counter. Hattie recorded these ordering times in seconds: 45, 52, 64, 87, 56, 21, 34, 49, 55, 29, 36. What was the mean (average) time in seconds it took customers to order?

- A. 528
- B. 64
- C. 49
- D. 48
- E. 43

**Answer:** D

NO.12 A shipment of 84 cell phones was sent in two types of boxes. Some boxes contained 6 phones and others contained 8 phones. An equal number of each type of box was used.

How many of each type of box was used?

- A. 6
- B. 12
- C. 36
- D. 42
- E. 48

**Answer:** A

NO.13 If  $x = 7$  and  $y = 3x + 2$ , what is the value of  $y$ ?

- A.  $3/5$
- B.  $5/3$
- C. 12
- D. 20
- E. 23

**Answer:** E

NO.14 Santos runs a restaurant in his neighborhood. Of his employees,  $4/5$  are willing to work nights. Of those willing to work nights,  $1/2$  are willing to work on weekends.

If Santos has 40 employees, how many are willing to work on weekend nights?

- A. 5
- B. 16
- C. 20
- D. 24
- E. 32

**Answer:** B

NO.15 If a helicopter flies at an average speed of 80 kilometers per hour, approximately how long will it take to travel 650 kilometers?

- A. 5 to 6 hours
- B. 6 to 7 hours
- C. 7 to 8 hours
- D. 8 to 9 hours
- E. 9 to 10 hours

**Answer:** D

NO.16 Avery charges a fixed amount for a house call plus an hourly fee of \$12.50 for repairing televisions. His bill for repairing a television in a customer's home was \$62.00.

If Avery worked 4 hours, what was the fixed amount he charged for the house call?

- A. \$ 6.00
- B. \$12.00
- C. \$16.50
- D. \$49.50
- E. \$50.00

***Answer:*** B